


Level 1
Unit 8.1
Counting Dots with
Numbers up to 11

Time Taken: Total Score:


1. Write the numbers from 11 to 20.

Eleven 11	Twelve 12	Thirteen 13	Fourteen 14	Fifteen 15
Sixteen 16	Seventeen 17	Eighteen 18	Nineteen 19	Twenty 20


2. Match the following.




6




7




8



9





10





11


3. Count the dots and write the numbers.



6


<div style="border: 1px solid black; width: 100%; height: 40px;"></div>


<div style="border: 1px solid black; width: 100%; height: 40px;"></div>


<div style="border: 1px solid black; width: 100%; height: 40px;"></div>


<div style="border: 1px solid black; width: 100%; height: 40px;"></div>


<div style="border: 1px solid black; width: 100%; height: 40px;"></div>

4. Solve the following problems.

Extra

i. Choose the correct number of letters in the word 'MATHEMATICS'.

M A T H E M A T I C S

a. 10

b. 11

c. 12

d. 13

ii. The dots show the number of players on a football team.

So, there are

players on a football team.

