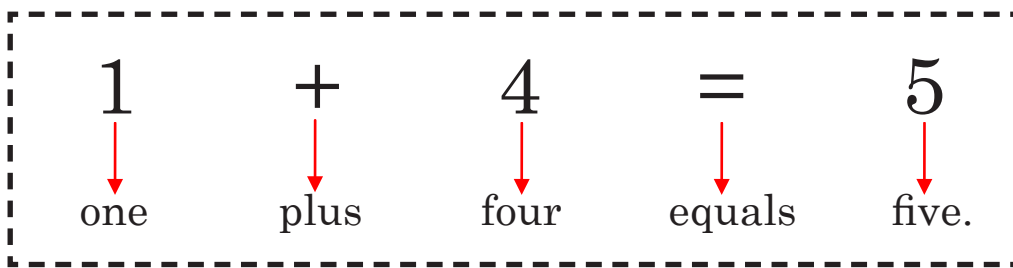
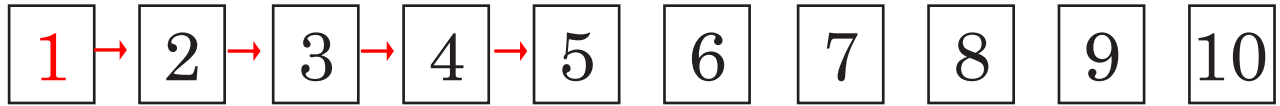


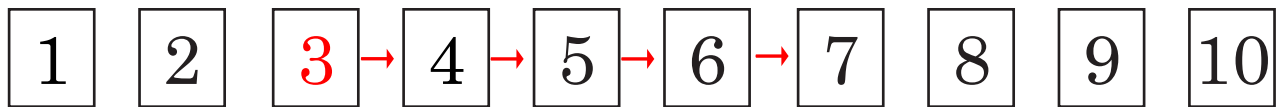


1. Add the following as shown below.

Example:



a.



$$3 + 4 = 7$$

three plus four equals seven.

b.  $4 + 4 =$  \_\_\_\_\_

c.  $5 + 4 =$  \_\_\_\_\_

d.  $6 + 4 =$  \_\_\_\_\_

e.  $7 + 4 =$  \_\_\_\_\_

f.  $8 + 4 =$  \_\_\_\_\_

2. Add 4.

a.  $7 + 4 = \underline{\quad}$

e.  $6 + 4 = \underline{\quad}$

b.  $5 + 4 = \underline{\quad}$

f.  $4 + 4 = \underline{\quad}$

c.  $3 + 4 = \underline{\quad}$

g.  $2 + 4 = \underline{\quad}$

d.  $1 + 4 = \underline{\quad}$

h.  $8 + 4 = \underline{\quad}$

3. Solve the following problems.

i. Four more than 7 is .

a. 7

b. 10

c. 11

d. 12

ii. There are 8 .

Four more  come.

How many tigers are there in all?

$\square + 4 = \square$

There are  tigers in all.

Extra