

# Math Practice Sheets

Solid and Measurement



Student Name


---

**Examples**

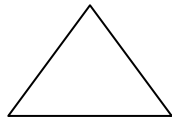
**Practice Questions**

**Extra Challenge Unit**


## Example



Circle



Triangle

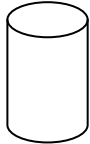


Rectangle

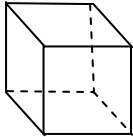


Square

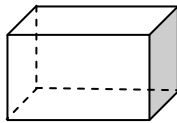
A solid is a figure which has three dimensions. i.e. length, width, and height.



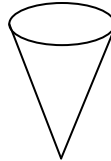
Cylinder



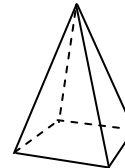
Cube



Rectangular  
Prism



Cone




Square  
Pyramid

## Exercise

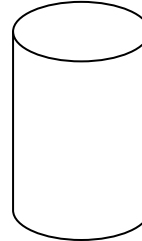
1. Identify each of following figures.

a)



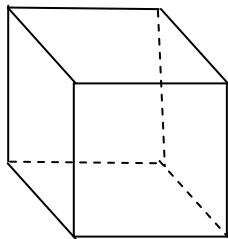
\_\_\_\_\_

b)



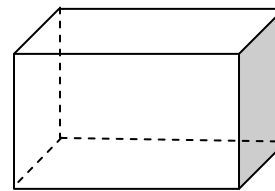
\_\_\_\_\_

c)



\_\_\_\_\_

d)



\_\_\_\_\_

2. List two items that have the shape of a square and two items that have the shape of a cone.