

Math Practice Sheets

Fractions

Student Name

Examples

Practice Questions

Extra Challenge Unit




Example

What fraction of this star's points is shaded?

There are 5 equal points. 3 of them are shaded. So, in the figure, $\frac{3}{5}$ of the points are


shaded, where 3 in the numerator that tells how many equal parts are shaded, and 5 in the denominator tells how many equal parts there are in all.



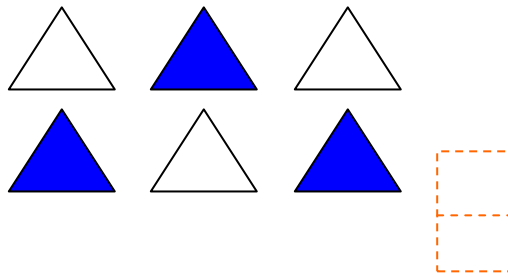
Exercise

1. What part of each total figure are the blue parts?

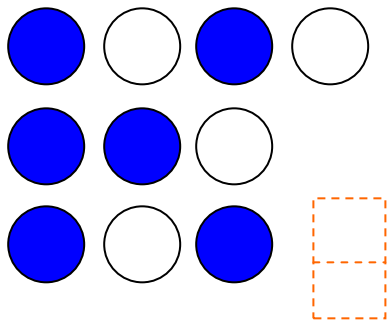
a)



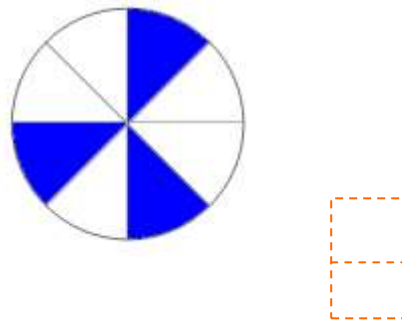
b)



c)



d)



e)

