

Math Practice Sheets

Review of Lesson 17, 18, 19, and 20

Student Name

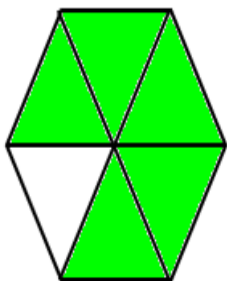
Practice Questions



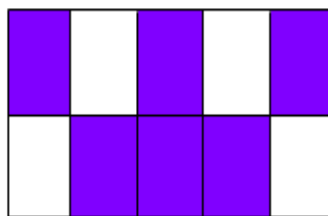
Exercise

- Put the colored parts in the numerator. Put the total parts in the denominator. Reduce the fraction if possible.


a)



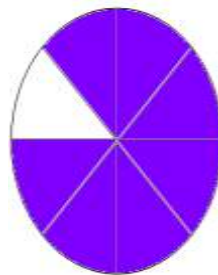
b)



c)



d)



- Pinky earns \$75 each day. She spends \$25 for food. What fraction of her income does she spend for food? Write in simplest fractional form.
- There are 250 students in a school. If there are 50 girls, what fraction of the students are girls? Write in simplest fractional form.
- Write the following divisions in fraction form.
 - $13 \div 26$
 - $3 \div 15$
 - $9 \div 27$
 - $3 \div 18$