

Math Practice Sheets

Subtraction

Student Name _____

Examples


Practice Questions

Extra Challenge Unit

Unit
5.1

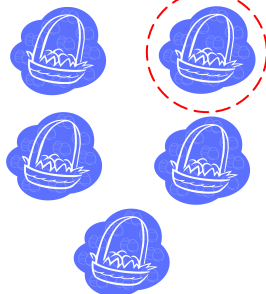
Subtraction

Example



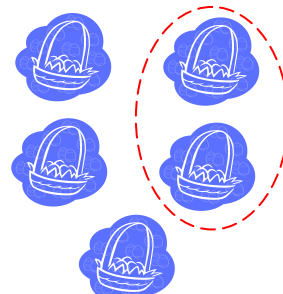
0 less than 5 is 5.

$$5 - 0 = 5$$



1 less than 5 is 4.

$$5 - 1 = 4$$



2 less than 5 is 3.

$$5 - 2 = 3$$

Exercise

1. Draw lines to match.

a)

$$9 - 0$$

b)

$$5 - 2$$

c)

$$6 - 1$$

d)

$$8 - 2$$

e)

$$3 - 0$$

f)

$$7 - 1$$

g)

$$4 - 2$$

A)

2 less

B)

0 less

C)

1 less