

Math Practice Sheets

Understanding Patterns and Numbers to 1,000 Part I

Student Name _____

Examples

Practice Questions

Extra Challenge Unit

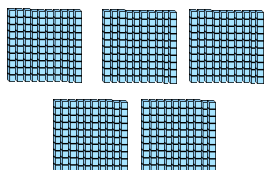
Example

10 ones make 1 ten.

10 tens make 1 hundred.

10 hundreds make 1 thousand.

What is the number?



500


100 less is 400.

100 more is 600.

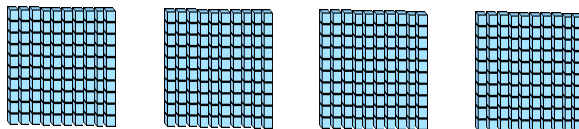
Exercise

1. What is the number?

a)



b)



c)

