

Math Practice Sheets

Introduction to Geometry Part II

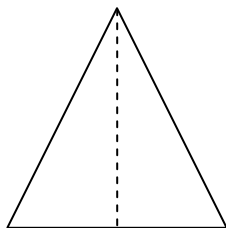
Student Name _____

Examples

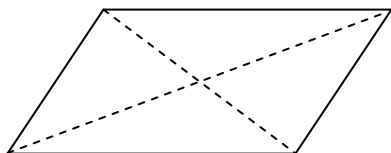
Practice Questions

Extra Challenge Unit

Example



The dotted line cuts the given triangle into 2 triangles.



Two dotted lines cut a parallelogram into 4 triangles.


Exercise

1. Draw a line to make 2 squares from following shapes.

a)



b)



2. Draw two lines to make 4 triangles from following shapes.

a)



b)



c)



d)

