

Math Practice Sheets

Introduction to Addition and Subtraction

Student Name _____

Examples

Practice Questions

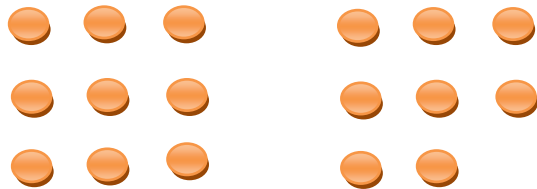
Extra Challenge Unit

Unit
1.1

Addition Sentences

Example

Add the counters and write addition sentences.




$$9 + 8 = 17$$

9 plus 8 equals 17.

Exercise


1. Write an addition sentence for the counters.

a)




$$\underline{\quad} + \underline{\quad} = \underline{\quad}$$

b)




$$\underline{\quad} + \underline{\quad} = \underline{\quad}$$

c)




$$\underline{\quad} + \underline{\quad} = \underline{\quad}$$

d)




$$\underline{\quad} + \underline{\quad} = \underline{\quad}$$

e)



$$\underline{\quad} + \underline{\quad} = \underline{\quad}$$

f)



$$\underline{\quad} + \underline{\quad} = \underline{\quad}$$