

# Math Practice Sheets

Review of Lesson 15 to 27

Student Name



Practice Questions

## Review of Lesson 15 to 27

### Exercise


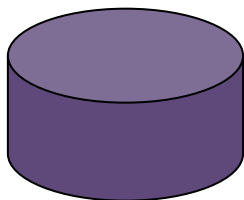
1. Write the name of the figure and find the number of flat surfaces, edges, and vertices of each of the following.

a)



\_\_\_\_\_

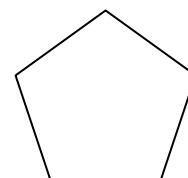

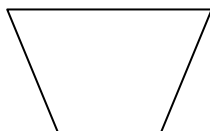
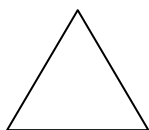
b)



\_\_\_\_\_

2. A solid figure which has one vertex and one flat surface is called \_\_\_\_\_ and the flat surface is called \_\_\_\_\_.
3. Color the shapes on the right that match the shape on the left.

a)



b)

