

# Math Practice Sheets

Review of Lesson 1, 2, 3, and 4

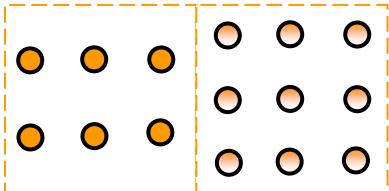
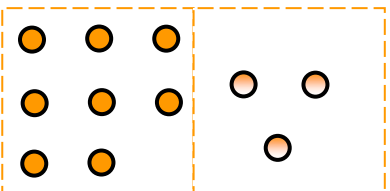
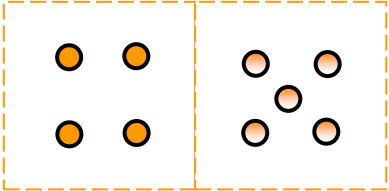
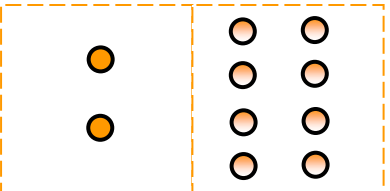
Student Name

Practice Questions

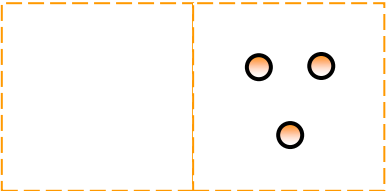
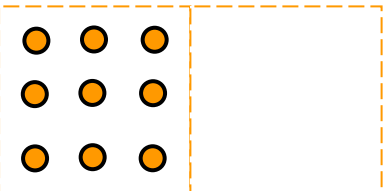


## Exercise

1. Write an addition sentence for the counters.

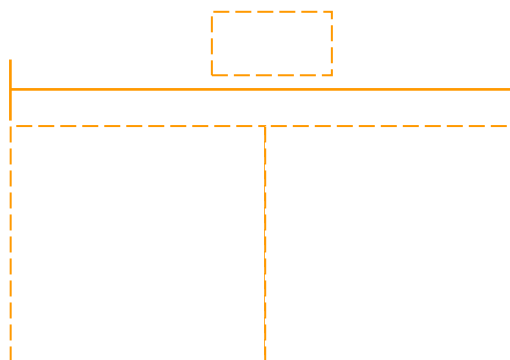
<p>a)</p>  <p style="text-align: center;">___ + ___ = ___</p>	<p>b)</p>  <p style="text-align: center;">___ + ___ = ___</p>
<p>c)</p>  <p style="text-align: center;">___ + ___ = ___</p>	<p>d)</p>  <p style="text-align: center;">___ + ___ = ___</p>

2. Fill in the missing counters. Then complete the addition sentence.

<p>a)</p>  <p style="text-align: center;">___ + 3 = 10</p>	<p>b)</p>  <p style="text-align: center;">9 + ___ = 14</p>
---	--

3. Draw a picture to find the sum.  
Then write an addition sentence.

Antonio buys 4 eggs at Krogers.  
He buys 6 eggs at Safeway.  
How many eggs does Antonio  
buy in all?



\_\_\_ eggs

\_\_\_ + \_\_\_ = \_\_\_